

# Maths Challenges

These challenges are linked to our Maths learning for 9<sup>th</sup> and 10<sup>th</sup> November. Please send your work to me at [year2@st-jo-st.dudley.sch.uk](mailto:year2@st-jo-st.dudley.sch.uk) I can't wait to see what you do.



Spot the mistake in each number tracks.

3	13	23	33	44	53	63	73	83	93
---	----	----	----	----	----	----	----	----	----

97	77	67	57	47	37	27	17	7
----	----	----	----	----	----	----	----	---

Rewrite the number tracks by correcting them.

--	--	--	--	--	--	--	--	--	--

--	--	--	--	--	--	--	--	--	--

Remember to write your answers as full sentences using our mathematical vocabulary – tens, ones.




Sue is counting backwards in 10s from 67.

Each number Sue says will be odd.










Always, sometimes or never?


2 Tick (✓) true or false for each statement.

	True	False
Ten more than 43 is 34.		
Ten less than 65 is 55.		
22... 32... 42... The next number is 62.		
97... 87... 77... The next number is 67.		
Ten less than 81 is ten more than 61.		
Ten less than 55 is ten more than 25.		
Ten more than 90 is 100.		










 = 40     
  = 10     
  = 30

Write the value of each row and column.

			<input type="text"/>
			<input type="text"/>
			<input type="text"/>
<input type="text"/>	<input type="text"/>	<input type="text"/>	

 = 30     
  = 10     
  = 50

Write the value of each row and column.


			<input type="text"/>
			<input type="text"/>
			<input type="text"/>
<input type="text"/>	<input type="text"/>	<input type="text"/>	












Create a similar problem for Mrs Riley to solve.



2 Tick (✓) true or false for each statement.

	True	False
Ten more than 43 is 34.		✓
Ten less than 65 is 55.	✓	
22... 32... 42... The next number is 62.		✓
97... 87... 77... The next number is 67.	✓	
Ten less than 81 is ten more than 61.	✓	
Ten less than 55 is ten more than 25.		✓
Ten more than 90 is 100.	✓	










 = 30    
  = 10    
  = 50

Write the value of each row and column.

			50
			90
			90
70	90	70	

 = 40    
  = 10    
  = 30

Write the value of each row and column.

			50
			90
			80
80	80	60	

## Answers:

Spot the mistake in each number tracks.

3	13	23	33	44	53	63	73	83	93
---	----	----	----	----	----	----	----	----	----

97	77	67	57	47	37	27	17	7
----	----	----	----	----	----	----	----	---

Rewrite the number tracks by correcting them.

3	13	23	33	43	53	63	73	83	93
---	----	----	----	----	----	----	----	----	----

87	77	67	57	47	37	27	17	7
----	----	----	----	----	----	----	----	---

Sue is counting backwards in 10s from 67.

Each number Sue says  
will be odd.

Always, sometimes or never?

Always. Each number will end in 7 which is odd.